

1. Work out $37.8 + 15.74$

.....
(1 mark)

2. Work out $39.4 - 27.62$

.....
(1 mark)

3. Work out 1.4×0.8

.....
(2 mark)

4. Work out $\pounds 8.43 \div 3$

.....
(2 mark)

5. Round 0.7518 to the nearest 1 dp

.....
(1 mark)

6. Work out -4×13

.....
(1 mark)7. What is $\frac{2}{3}$ of 36.....
(1 mark)

8. Find 40% of 24

.....
(1 mark)9. Convert $\frac{3}{4}$ to a decimal.....
(1 mark)

10. Calculate $15^2 - \sqrt{9}$

.....
(2 marks)

11. Write down the nth term

6, 8, 10, 12, 14

.....
(2 marks)

12. Simplify

$$\frac{18}{24}$$

.....
(1 mark)

Name : Class..... Score.....

13. Simplify $3h + 5h^2 - 2h^2 + 4h$

.....
(2 mark)

14. Simplify $3h \times 6ij$

.....
(1 mark)

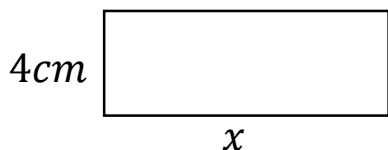
15. Expand and simplify
 $4(a + 5) + 3(a - 4)$

.....
(2 marks)

16. What is the HCF of 30 and 12

.....
(2 marks)

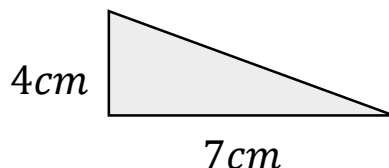
17. Calculate x



Perimeter = 24cm

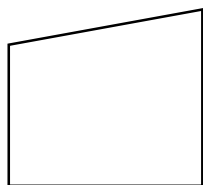
.....
(1 mark)

18. Calculate the area



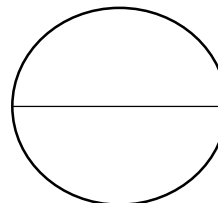
.....
(2 mark)

19. Name this shape



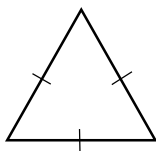
.....
(1 mark)

20. Name this part of a circle



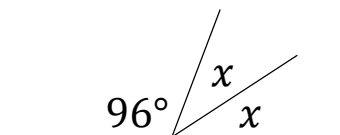
.....
(1 mark)

21. Draw all the lines of symmetry



.....
(1 mark)

22. Calculate x



$x =$

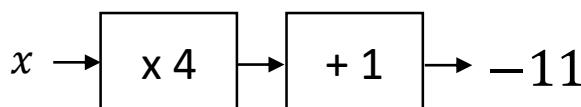
(1 mark)

23. Workout

$$8 \times 5 - 4^2$$

.....
(2 mark)

24. Solve



$x =$

(1 mark)